

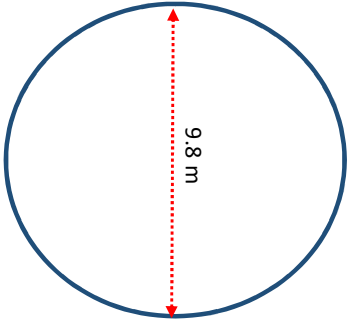
[a] **AREA of Circles**

<http://www.learnersgrid.com>

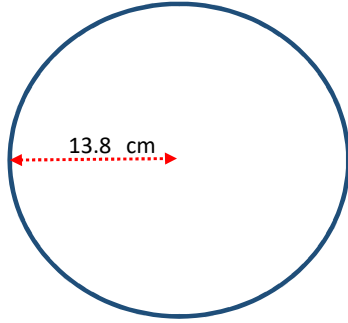
Give the area of each circle below. Include the correct unit of measurement in your answers.

Round to 1 d.p. if necessary.

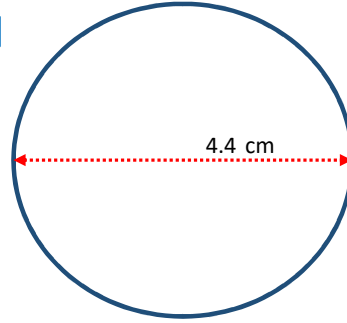
[1]



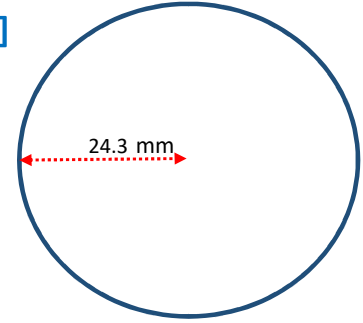
[2]



[3]



[4]



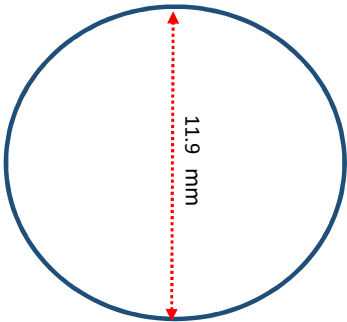
[b] **AREA of Circles**

<http://www.learnersgrid.com>

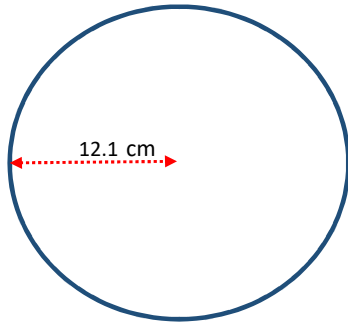
Give the area of each circle below. Include the correct unit of measurement in your answers.

Round to 1 d.p. if necessary.

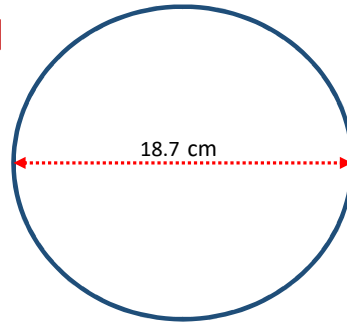
[1]



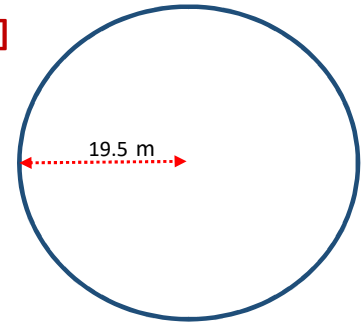
[2]



[3]



[4]



[a] AREA of Circles

ANSWERS

ANSWERS

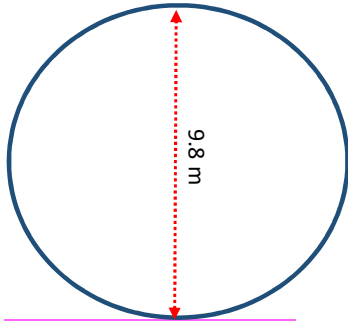
ANSWERS

Give the area of each circle below. Include the correct unit of measurement in your answers.

<http://www.learnersgrid.com>

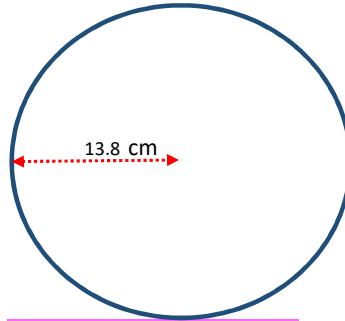
Round to 1 d.p. if necessary.

[1]



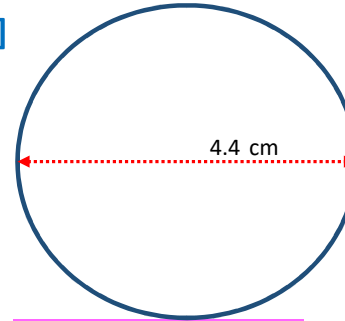
$$A = 75.4 \text{ m}^2$$

[2]



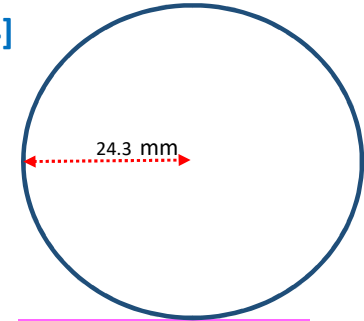
$$A = 598.3 \text{ cm}^2$$

[3]



$$A = 15.2 \text{ cm}^2$$

[4]



$$A = 1855.1 \text{ mm}^2$$

[b] AREA of Circles

ANSWERS

ANSWERS

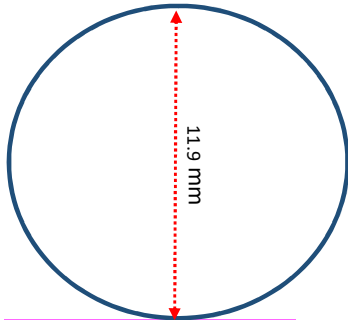
ANSWERS

Give the area of each circle below. Include the correct unit of measurement in your answers.

<http://www.learnersgrid.com>

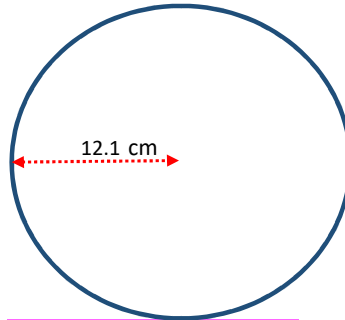
Round to 1 d.p. if necessary.

[1]



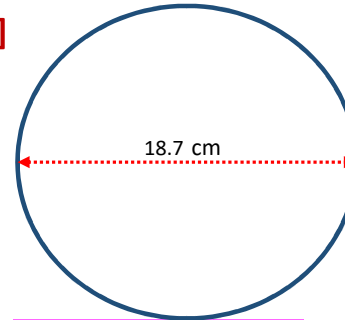
$$A = 111.2 \text{ mm}^2$$

[2]



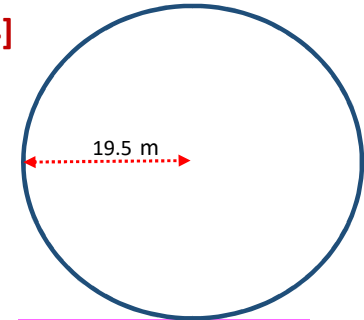
$$A = 460 \text{ cm}^2$$

[3]



$$A = 274.6 \text{ cm}^2$$

[4]



$$A = 1194.6 \text{ m}^2$$