

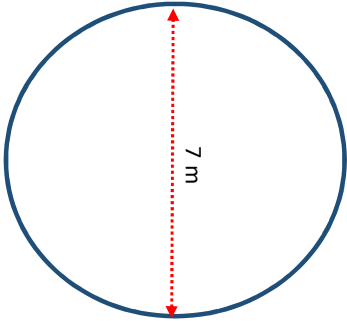
[a] **AREA of Circles**

<http://www.learnersgrid.com>

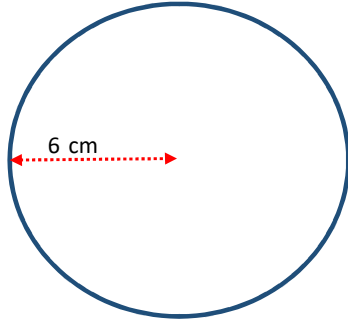
Give the area of each circle below. Include the correct unit of measurement in your answers.

Round to 1 d.p. if necessary.

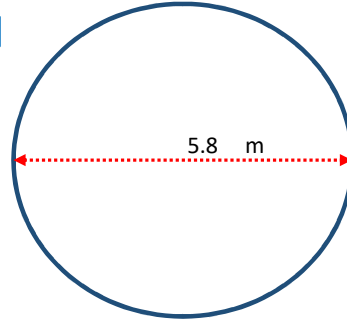
[1]



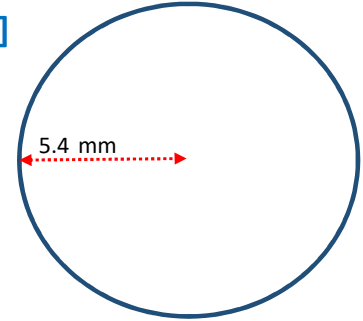
[2]



[3]



[4]



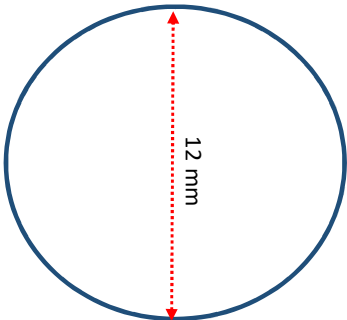
[b] **AREA of Circles**

<http://www.learnersgrid.com>

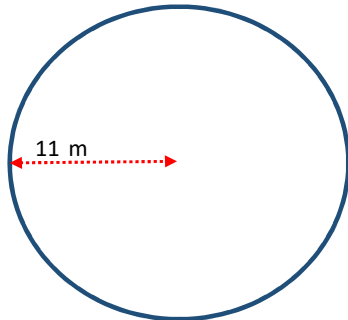
Give the area of each circle below. Include the correct unit of measurement in your answers.

Round to 1 d.p. if necessary.

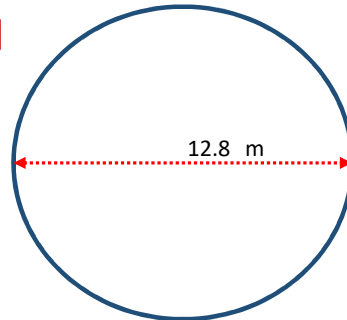
[1]



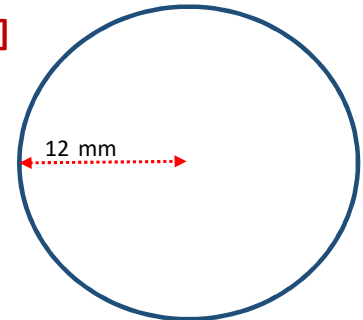
[2]



[3]



[4]



[a] AREA of Circles

ANSWERS

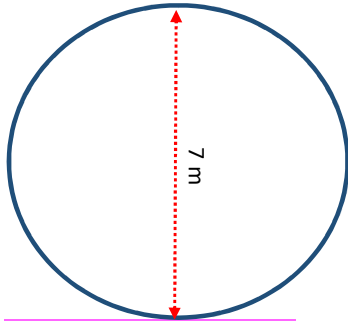
ANSWERS

ANSWERS

Give the area of each circle below. Include the correct unit of measurement in your answers.
Round to 1 d.p. if necessary.

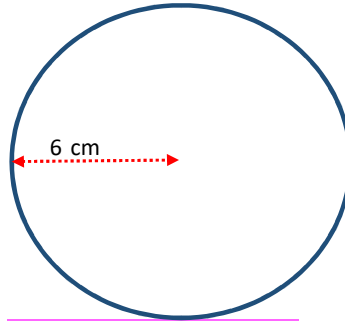
<http://www.learnersgrid.com>

[1]



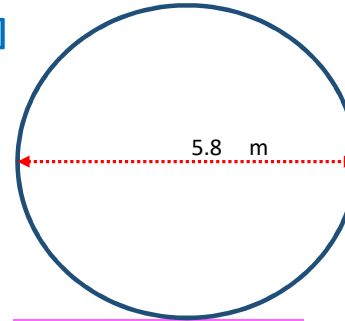
$$A = 38.5 \text{ m}^2$$

[2]



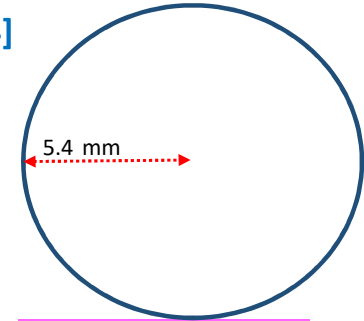
$$A = 113.1 \text{ cm}^2$$

[3]



$$A = 26.4 \text{ m}^2$$

[4]



$$A = 91.6 \text{ mm}^2$$

[b] AREA of Circles

ANSWERS

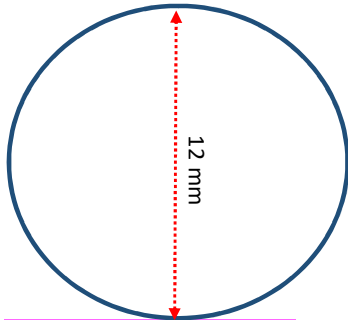
ANSWERS

ANSWERS

Give the area of each circle below. Include the correct unit of measurement in your answers.
Round to 1 d.p. if necessary.

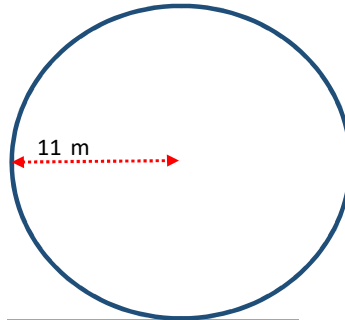
<http://www.learnersgrid.com>

[1]



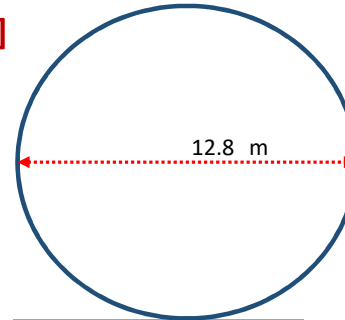
$$A = 113.1 \text{ mm}^2$$

[2]



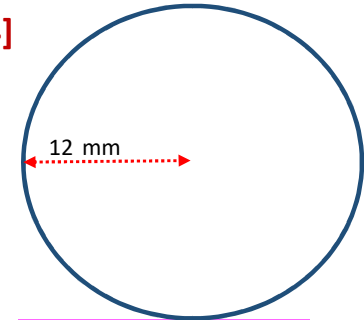
$$A = 380.1 \text{ m}^2$$

[3]



$$A = 128.7 \text{ m}^2$$

[4]



$$A = 467.6 \text{ mm}^2$$