

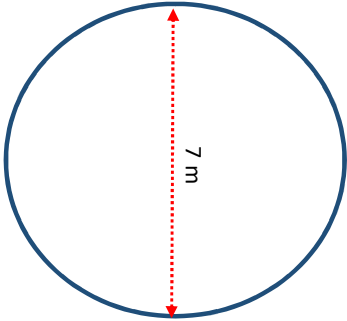
[a] **AREA of Circles**

<http://www.learnersgrid.com>

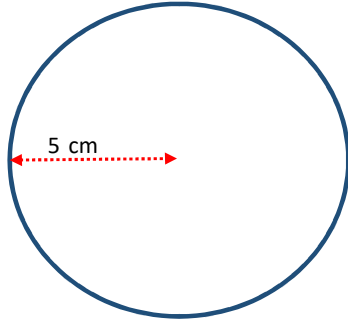
Give the area of each circle below. Include the correct unit of measurement in your answers.

Round to 1 d.p. if necessary.

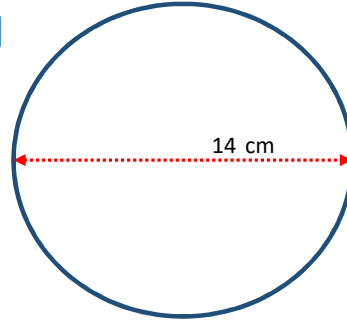
[1]



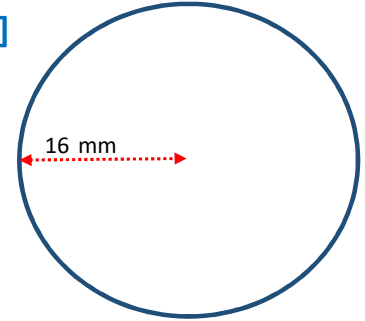
[2]



[3]



[4]



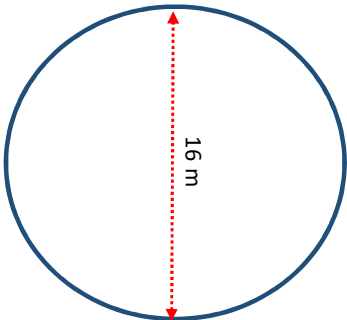
[b] **AREA of Circles**

<http://www.learnersgrid.com>

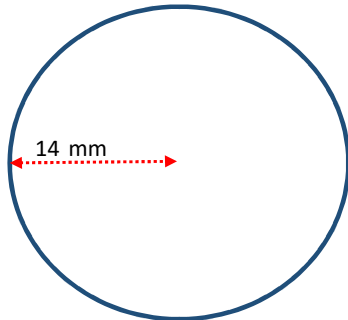
Give the area of each circle below. Include the correct unit of measurement in your answers.

Round to 1 d.p. if necessary.

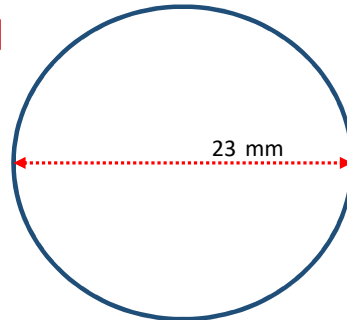
[1]



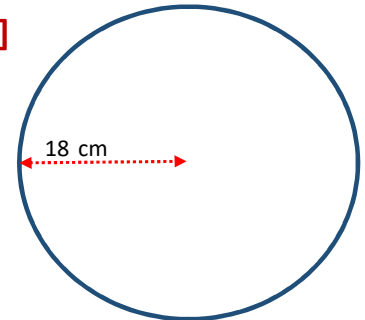
[2]



[3]



[4]



[a] **AREA of Circles**

ANSWERS

ANSWERS

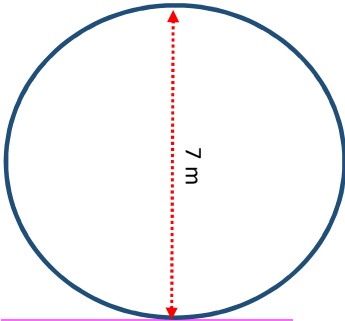
ANSWERS

Give the area of each circle below. Include the correct unit of measurement in your answers.

<http://www.learnersgrid.com>

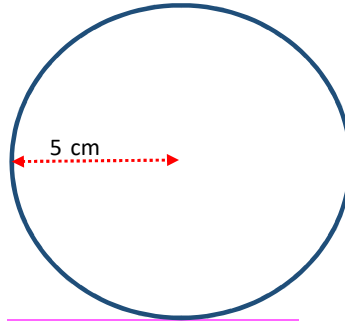
Round to 1 d.p. if necessary.

[1]



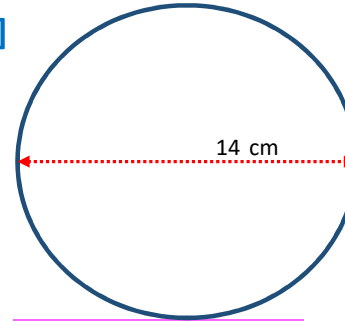
$A = 38.5 \text{ m}^2$

[2]



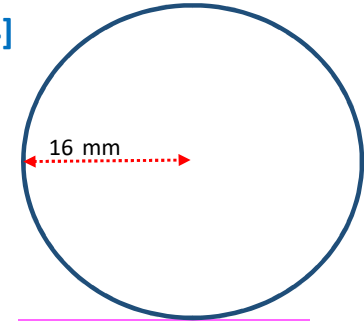
$A = 78.5 \text{ cm}^2$

[3]



$A = 153.9 \text{ cm}^2$

[4]



$A = 804.2 \text{ mm}^2$

[b] **AREA of Circles**

ANSWERS

ANSWERS

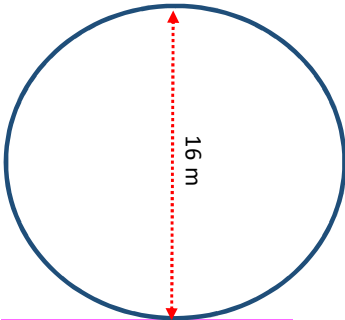
ANSWERS

Give the area of each circle below. Include the correct unit of measurement in your answers.

<http://www.learnersgrid.com>

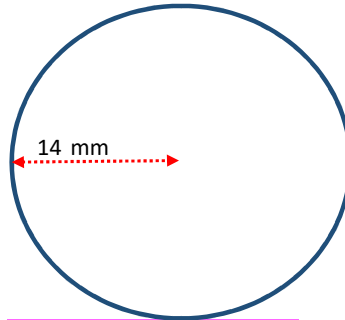
Round to 1 d.p. if necessary.

[1]



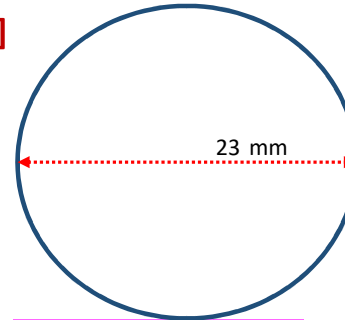
$A = 201.1 \text{ m}^2$

[2]



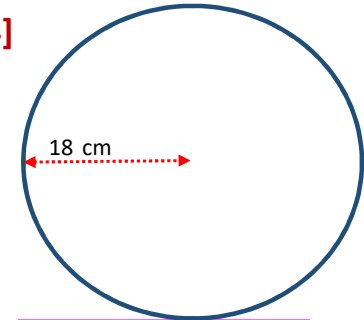
$A = 615.8 \text{ mm}^2$

[3]



$A = 415.5 \text{ mm}^2$

[4]



$A = 1017.9 \text{ cm}^2$