

[1] Calculate the

area:

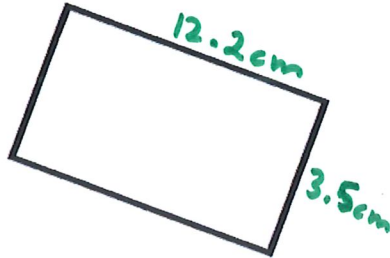
perimeter:



[2] Calculate the

area:


perimeter:




[3] Calculate the

area:


perimeter:



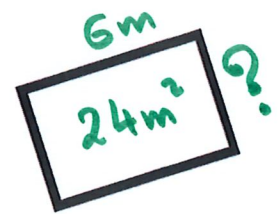
[4] Calculate the missing dimension:



[5] Calculate the missing dimension:



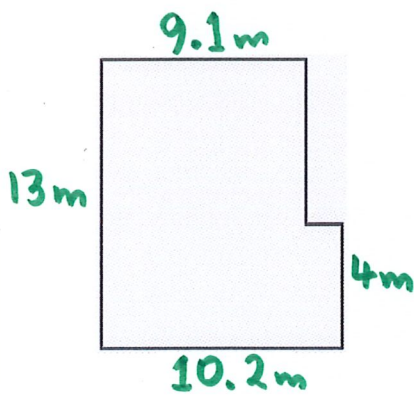
[6] Calculate the missing dimension:



[7] Calculate the

area:

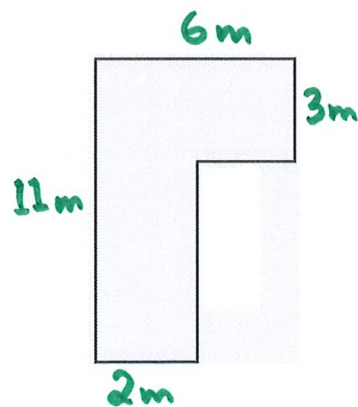
perimeter:



[8] Calculate the

area:

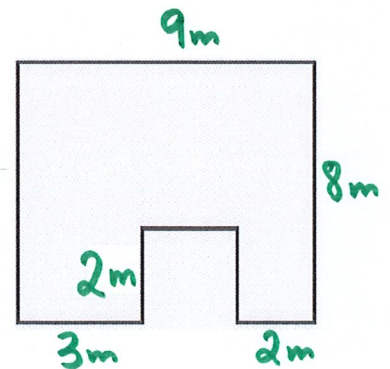
perimeter:



[9] Calculate the

area:

perimeter:




ANSWERS

[1] Calculate the

area: 39.2 cm^2

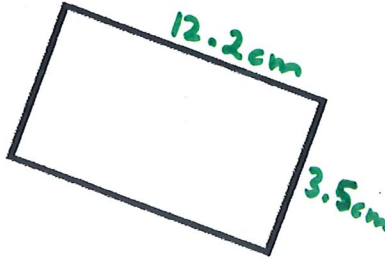
perimeter: 25.2 cm
 5.6 cm



[2] Calculate the

area: 42.7 cm^2


perimeter: 31.4 cm



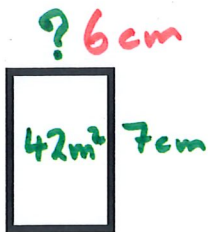
[3] Calculate the

area: 26 cm^2


perimeter: 21 cm



[4] Calculate the missing dimension:



[5] Calculate the missing dimension:



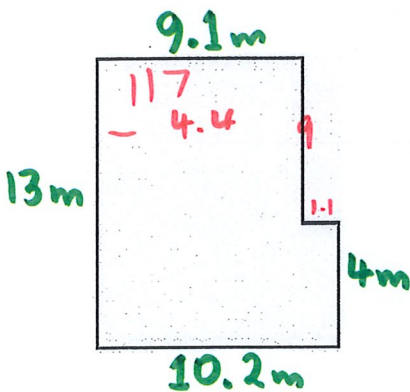
[6] Calculate the missing dimension:



[7] Calculate the

area: 112.6 m^2

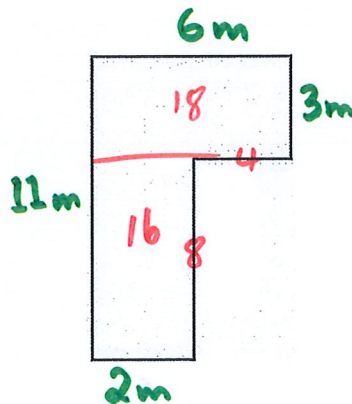
perimeter: 46.4 m



[8] Calculate the

area: 34 cm^2

perimeter: 34 cm



[9] Calculate the

area: 64 m^2

perimeter: 38 m

