

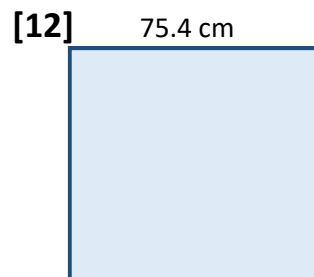
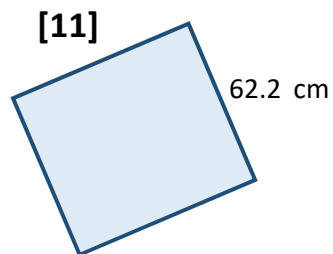
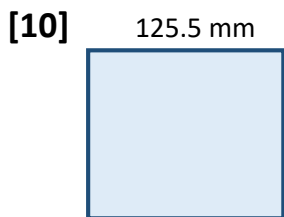
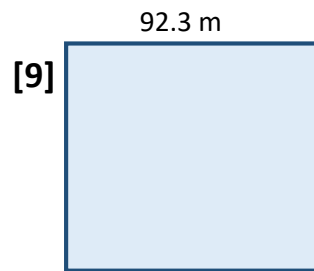
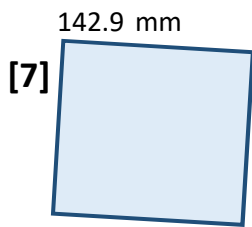
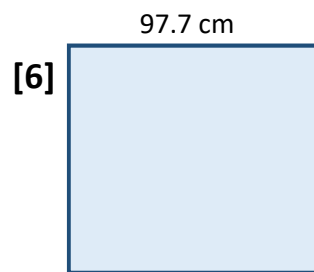
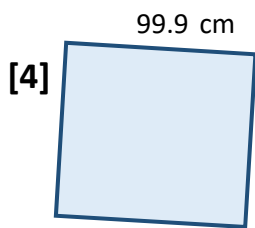
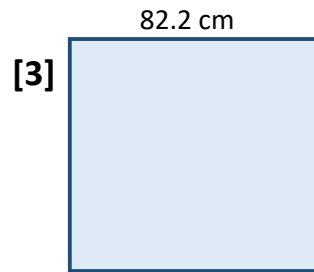
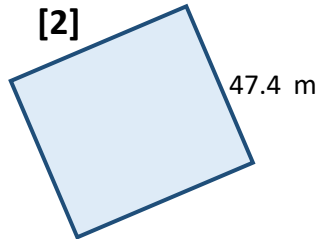
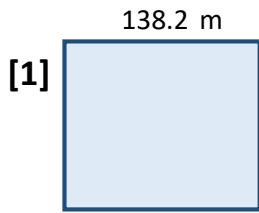
Area (Squares)

Date:

Name:

<http://www.learnersgrid.com>

Give the area of each square below.
Use your calculator! Round to 2 d.p.



ANSWERS

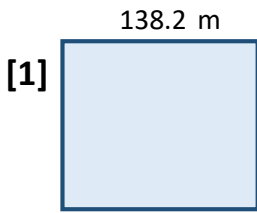
Area (Squares)

Date:

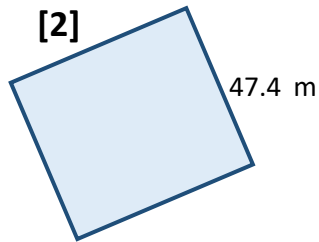
Name:

<http://www.learnersgrid.com>

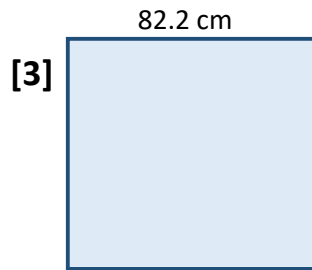
Give the area of each square below.
Use your calculator! Round to 2 d.p.



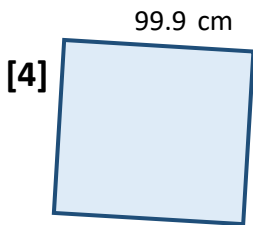
$$A = 19099.24 \text{ m}^2$$



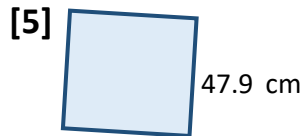
$$A = 2246.76 \text{ m}^2$$



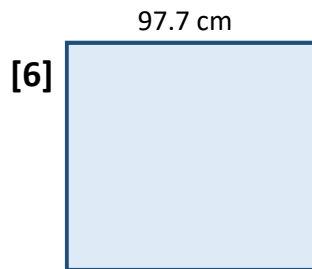
$$A = 6756.84 \text{ cm}^2$$



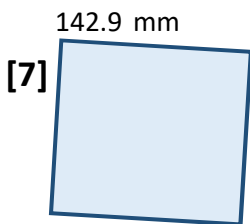
$$A = 9980.01 \text{ cm}^2$$



$$A = 2294.41 \text{ cm}^2$$



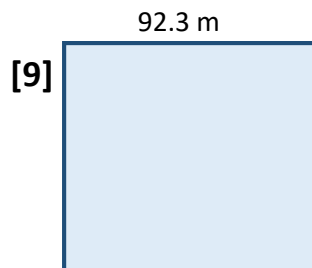
$$A = 9545.29 \text{ cm}^2$$



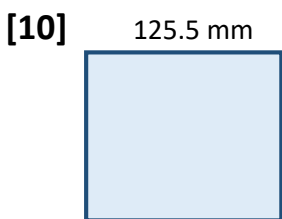
$$A = 20420.41 \text{ mm}^2$$



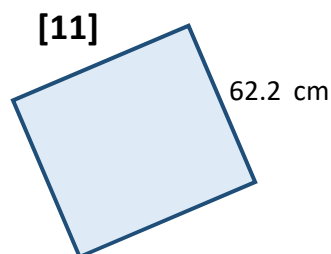
$$A = 3931.29 \text{ mm}^2$$



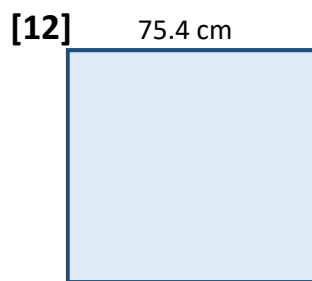
$$A = 8519.29 \text{ m}^2$$



$$A = 15750.25 \text{ mm}^2$$



$$A = 3868.84 \text{ cm}^2$$



$$A = 5685.16 \text{ cm}^2$$