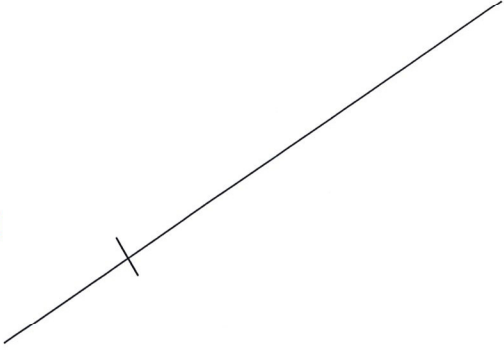

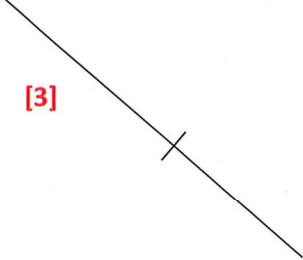


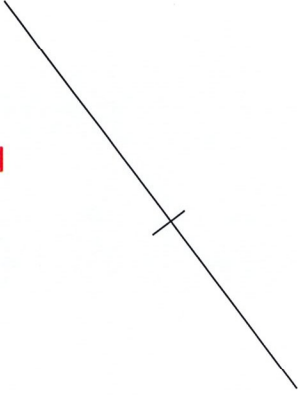

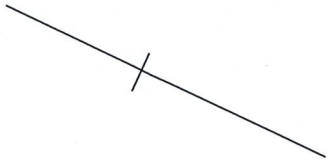


Perpendicular Bisectors: Bisecting at a point of a line segment Date: Name:

Use a compass and a straight edge to construct a perpendicular bisector for each line segment below which intersects at the given point on each line segment. **Show all construction lines.**

<p>[1]</p> 	<p>[2]</p> 
<p>[3]</p> 	<p>[4]</p> 
<p>[5]</p> 	<p>[6]</p> 
<p>[7]</p> 	<p>[8]</p> 

SOLUTIONS

Perpendicular Bisectors: Bisecting at a point of a line segment Date: Name:

Use a compass and a straight edge to construct a perpendicular bisector for each line segment below which intersects at the given point on each line segment. Show all construction lines.

<p>[1]</p>	<p>[2]</p>
<p>[3]</p>	<p>[4]</p>
<p>[5]</p>	<p>[6]</p>
<p>[7]</p>	<p>[8]</p>