

Perimeter (Squares) Name: _____

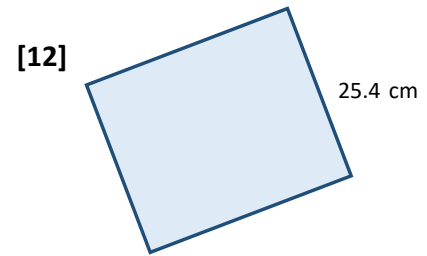

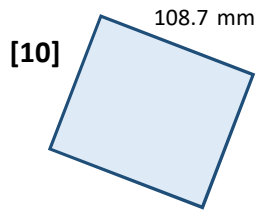
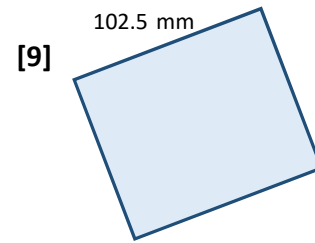
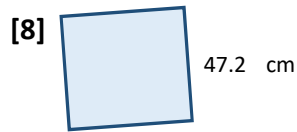
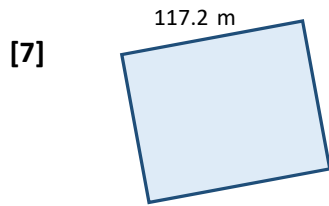
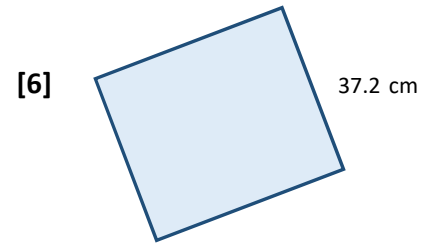
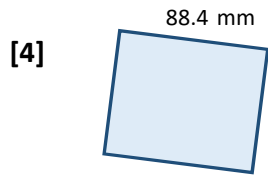
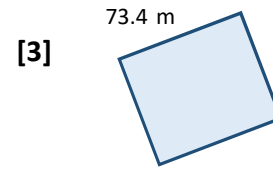
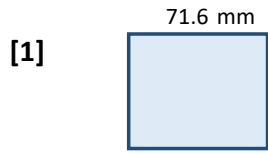
Date: _____

Use formulae to give perimeter of each square and show ALL YOUR WORKING!

<http://www.learnersgrid.com>

Use your calculator

Round to 2 d.p. if necessary.



Perimeter (Squares)

ANSWERS

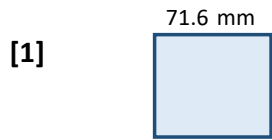
Date:

Use formulae to give perimeter of each square and show ALL YOUR WORKING!

<http://www.learnersgrid.com>

Use your calculator

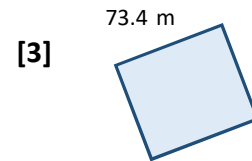
Round to 2 d.p. if necessary.



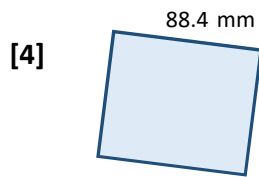
$$P = 143.2 \text{ mm}$$



$$P = 125.8 \text{ m}$$



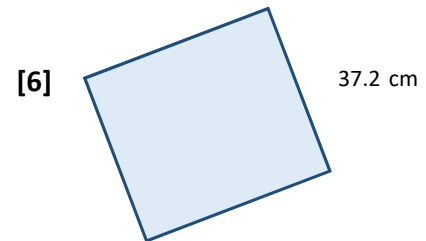
$$P = 146.8 \text{ m}$$



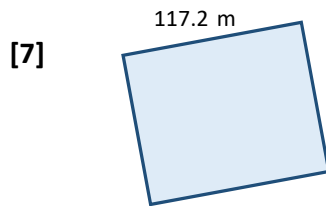
$$P = 176.8 \text{ mm}$$



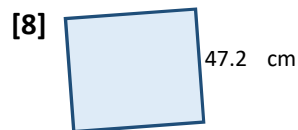
$$P = 104.2 \text{ m}$$



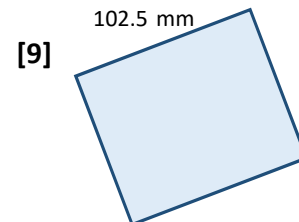
$$P = 74.4 \text{ cm}$$



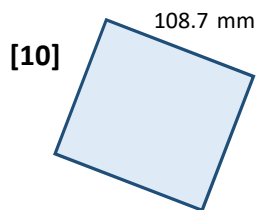
$$P = 234.4 \text{ m}$$



$$P = 94.4 \text{ cm}$$



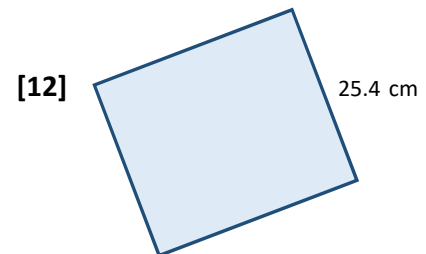
$$P = 205 \text{ mm}$$



$$P = 217.4 \text{ mm}$$



$$P = 124.4 \text{ m}$$



$$P = 50.8 \text{ cm}$$