

Perimeter (Squares) Name: _____

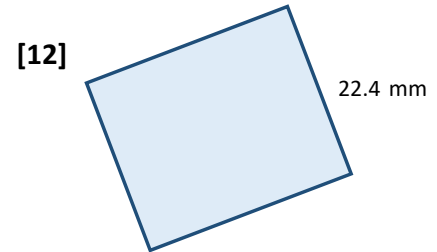
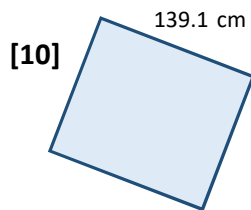
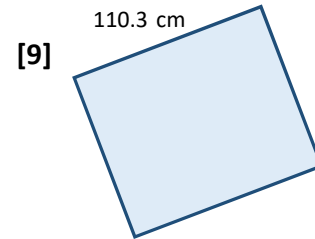
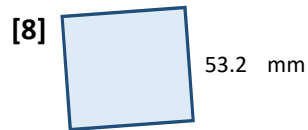
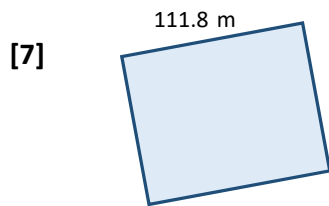
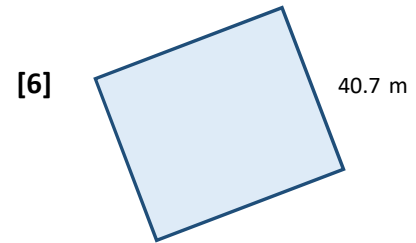

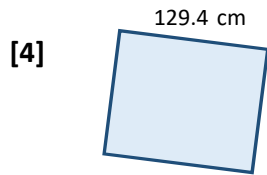
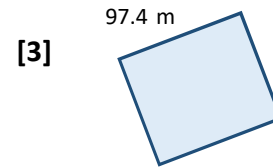
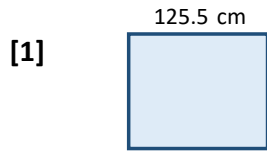
Date: _____

Use formulae to give perimeter of each square and show ALL YOUR WORKING!

<http://www.learnersgrid.com>

Use your calculator

Round to 2 d.p. if necessary.



Perimeter (Squares)

ANSWERS

Date:

Use formulae to give perimeter of each square and show ALL YOUR WORKING!

<http://www.learnersgrid.com>

Use your calculator

Round to 2 d.p. if necessary.

