

ENLARGEMENT.

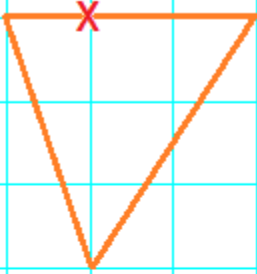
Date:

Name:

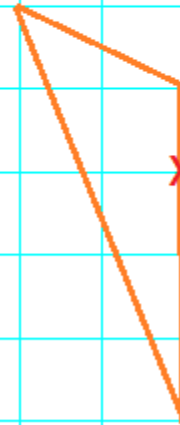
<http://www.learnersgrid.com>

Enlarge each shape below about the indicated Centre of Enlargement (CoE): X

[1] Enlarge by s.f. 3



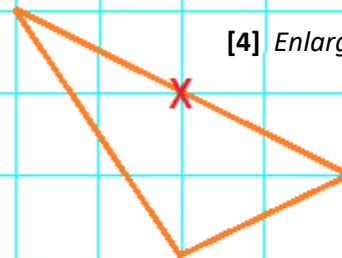
[2] Enlarge by s.f. 2



[3] Enlarge by s.f. 2



[4] Enlarge by s.f. 2



ENLARGEMENT.

Date:

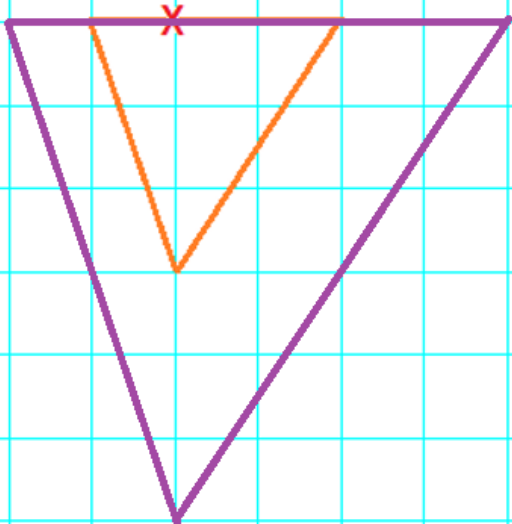
Name:

Solutions

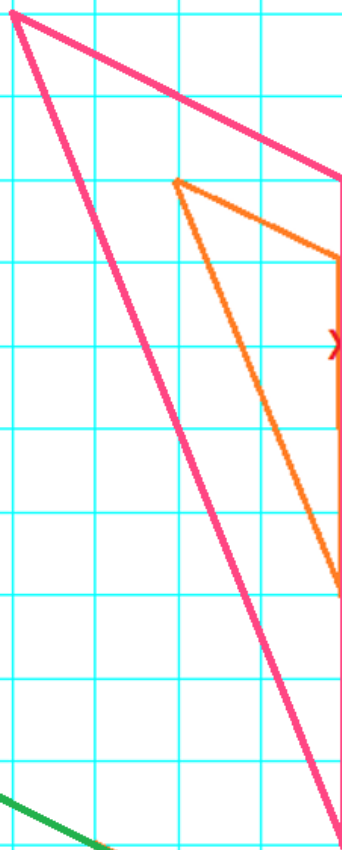
<http://www.learnersgrid.com>

Enlarge each shape below about the indicated Centre of Enlargement (CoE): X

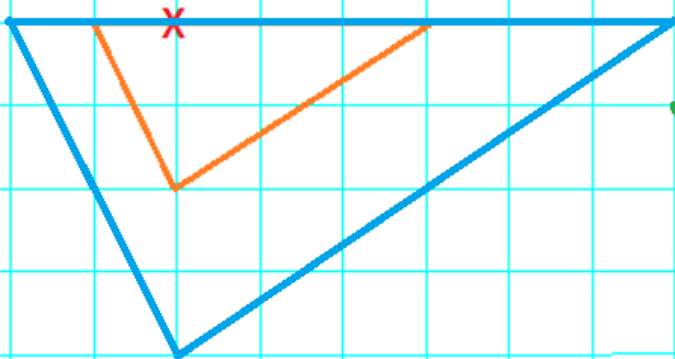
[1] Enlarge by s.f. 3



[2] Enlarge by s.f. 2



[3] Enlarge by s.f. 2



[4] Enlarge by s.f. 2

