

Give the percentage of each grid that is shaded green.

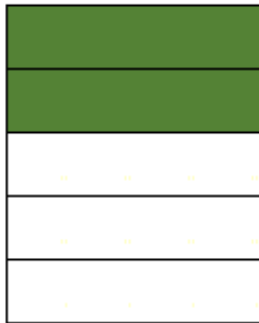
(Round to 1 d.p. if necessary)

Date:

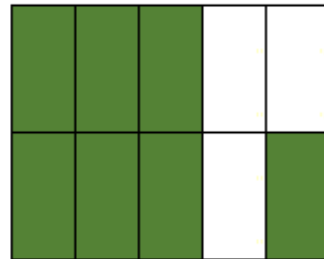
Name:

<http://www.learnersgrid.com>

[1]




[2]



[3]



[4]



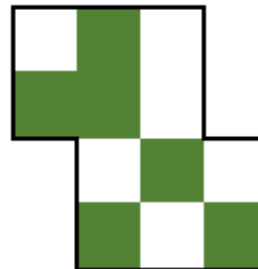
[5]




[6]



[7]



[8]



Give the percentage of each grid that is shaded green.

(Round to 1 d.p. if necessary)

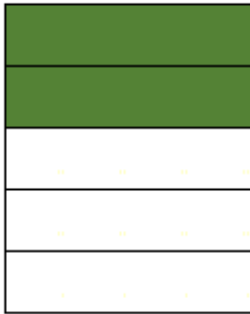
Date:

Name:

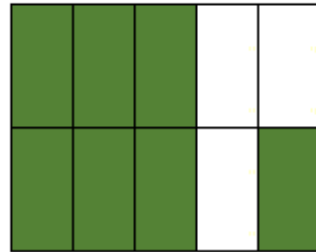
<http://www.learnersgrid.com>

Solutions

[1] 40%




[2] 70%




[3] 50%



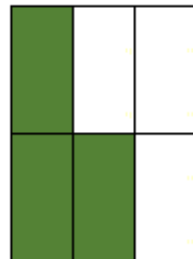
[4] 50%




[5] 42.9%



[6] 50%



[7] 50%



[8] 43.8%

