

Give the percentage of each grid that is shaded green.

(Round to 1 d.p. if necessary)

Date:

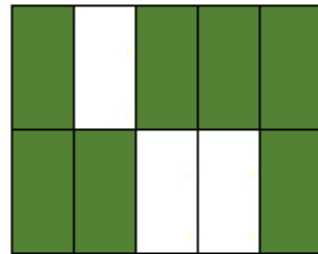
Name:

<http://www.learnersgrid.com>


[1]




[2]




[3]



[4]




[5]




[6]



[7]



[8]



Give the percentage of each grid that is shaded green.

(Round to 1 d.p. if necessary)


Date:

Name:

<http://www.learnersgrid.com>

Solutions


[1] 20%



[2] 70%



[3] 50%



[4] 50%




[5] 71.4%



[6] 50%



[7] 58.3%



[8] 37.5%

