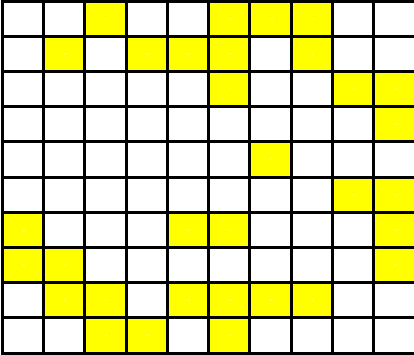


Give the percentage of each grid that is shaded yellow.
 Give the percentage of each grid that is shaded yellow.

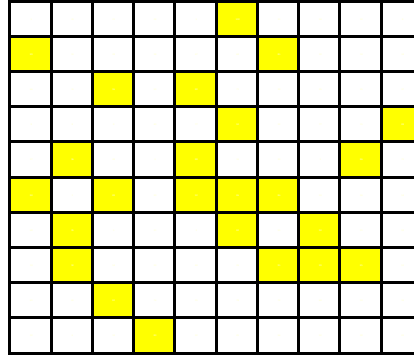
Date: _____ Name: _____
<http://www.learnersgrid.com>

Card A



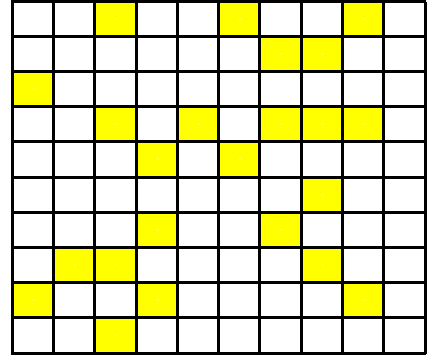
Card A	answer	=		%
--------	--------	---	--	---

Card B



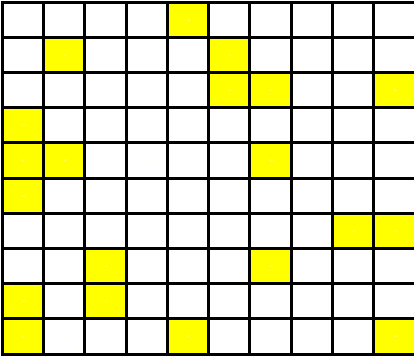
Card B	answer	=		%
--------	--------	---	--	---

Card C



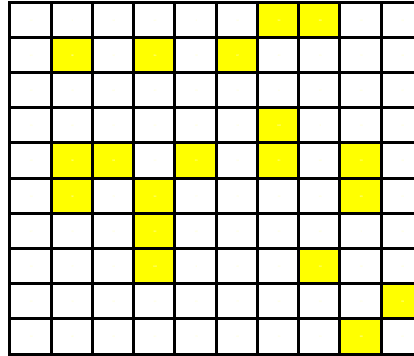
Card C	answer	=		%
--------	--------	---	--	---

Card D



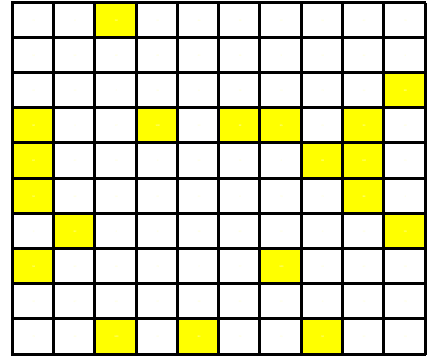
Card D	answer	=		%
--------	--------	---	--	---

Card E



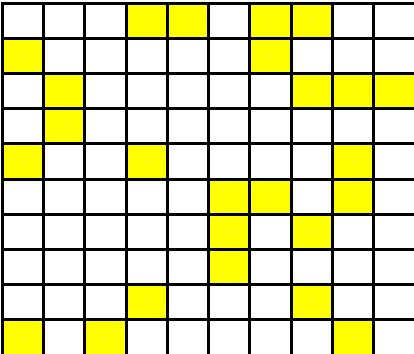
Card E	answer	=		%
--------	--------	---	--	---

Card F



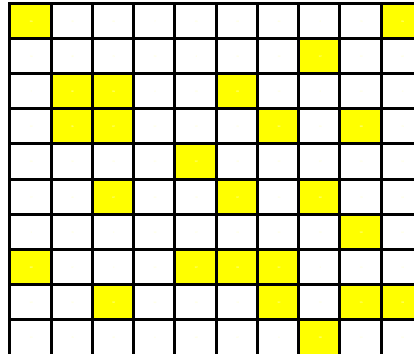
Card F	answer	=		%
--------	--------	---	--	---

Card G



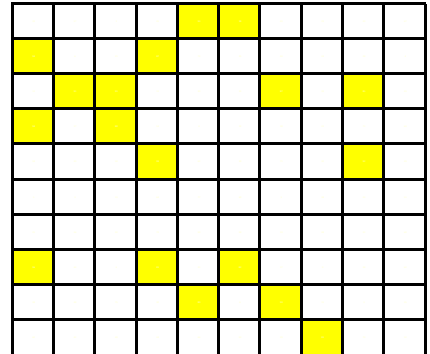
Card G	answer	=		%
--------	--------	---	--	---

Card H



Card H	answer	=		%
--------	--------	---	--	---

Card I



Card I	answer	=		%
--------	--------	---	--	---

SOLUTIONS

Give the percentage of each grid that is shaded yellow.

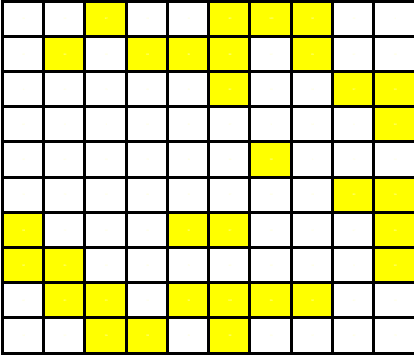
Date:

Name:

Give the percentage of each grid that is shaded yellow.

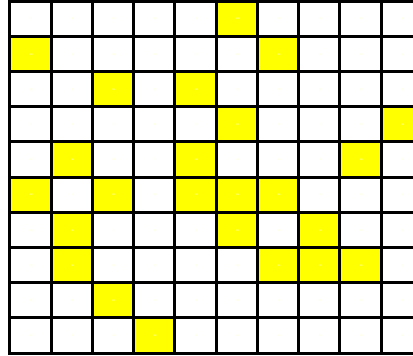
<http://www.learnersgrid.com>

Card A



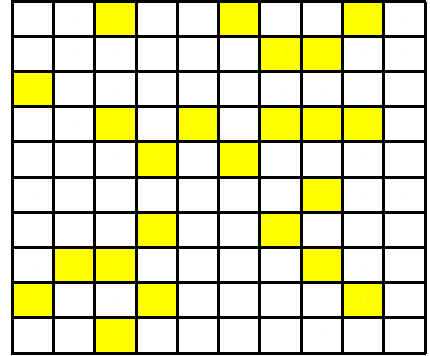
Card A answer = 32 %

Card B



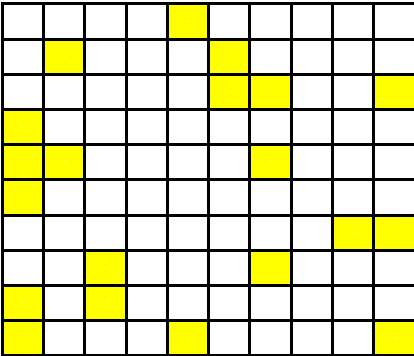
Card B answer = 24 %

Card C



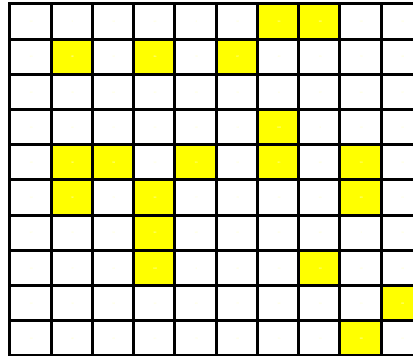
Card C answer = 23 %

Card D



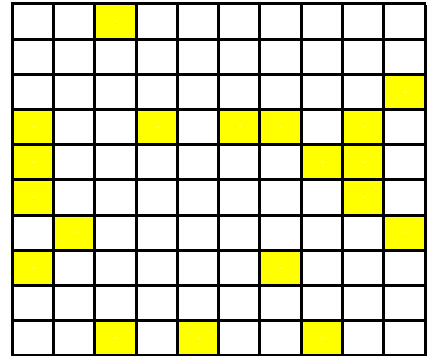
Card D answer = 20 %

Card E



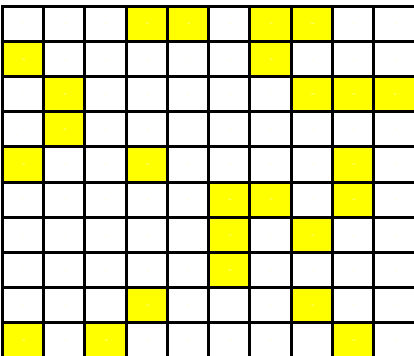
Card E answer = 19 %

Card F



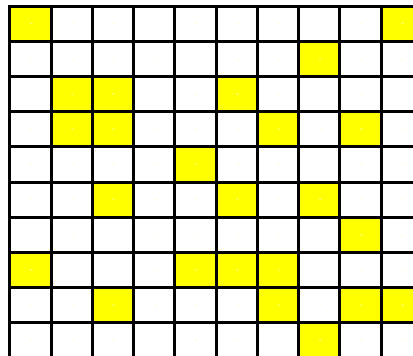
Card F answer = 19 %

Card G



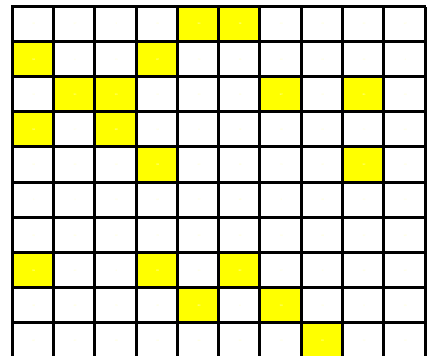
Card G answer = 25 %

Card H



Card H answer = 24 %

Card I



Card I answer = 18 %